

International Olympiad of Mathematics



Organized by:

Silverzone Foundation

New Delhi, India


For supremacy in Mathematics

www.silverzone.org

CLASS : 1 SAMPLE QUESTIONS

The Actual Question Paper Contains 25 Questions. The Duration of the Test Paper is 40 Minutes.

1. Which one of the following numbers comes in between?

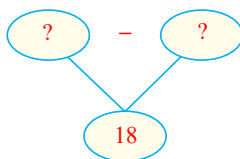


- A. 48 B. 47
C. 52 D. 50

2. Which among the following toys has the least cost in Indian rupees (₹)?

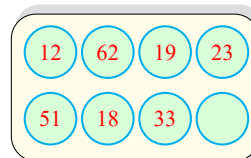


3. Which one of the following options will complete the difference given below?



- (A) 2 tens – 4 ones
(B) 2 tens – 2 ones
(C) 3 tens – 2 ones
(D) 2 tens – 8 ones


4. Which one of the following numbers is *not* written on the board given below?




- (A) Sixty two
(B) Thirty two
(C) Nineteen
(D) Fifty one
5. The length of a rectangle is 5 metres more than its breadth. If the breadth of the rectangle is 23 metres, then what is the length of the rectangle?
- (A) 18 metres
(B) 16 metres
(C) 19 metres
(D) 28 metres
6. If $\bigcirc = 3$ tens, then which one of the following is true for $\bigcirc + \bigcirc + \bigcirc$?

- (A) 90 (B) 60
(C) 80 (D) 70

7. Which of the following objects is thinner than  ?



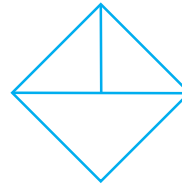
8. What will come in place of the question mark (?) in the number series given below?



- (A) 82
(C) 81

- (B) 83
(D) 84

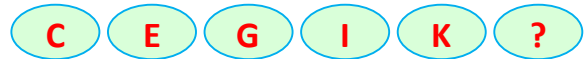
9. How many triangles can be formed using the figure given below?



- (A) 3
(C) 5

- (B) 4
(D) 2

10. What comes next in the letter series given below?



- (A) N
(C) M

- (B) L
(D) J

ANSWERS

1. (D) 2. (C) 3. (B) 4. (B) 5. (D) 6. (A) 7. (C) 8. (B) 9. (B) 10. (C)