



**CLASS : 2 SAMPLE QUESTIONS**

*The Actual Question Paper Contains 25 Questions. The Duration of the Test Paper is 40 Minutes.*

- Which one of the following numbers is more than 16 tens?  
(A) 158 (B) 185 (C) 138 (D) 145
- If the cost of 2 eggs is ₹ 8, then find the cost of 3 eggs.  
(A) ₹ 16 (B) ₹ 12 (C) ₹ 10 (D) ₹ 18
- In the morning, Mr. Mehta started driving his car at the time shown below in the clock. He reached his destination at 9 : 50 morning. How long did he drive the car?




- (A) 55 minutes (B) 1 hour 15 minutes  
(C) 1 hour 35 minutes (D) 1 hour 55 minutes
- Arrange the number boxes given below to make the smallest possible three digit number.  
  
(A) 758 (B) 875 (C) 578 (D) 587
  - Which one is the most suitable addition for the sum of the numbers of given below?

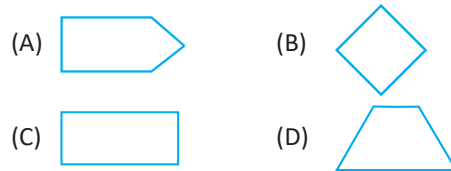


- (A)  $4 + 4 + 4 + 4 + 4 + 4 + 4 + 4$   
(B)  $6 + 6 + 6 + 6 + 6 + 6$   
(C)  $6 + 6 + 6 + 6$   
(D)  $4 + 4 + 4 + 4$

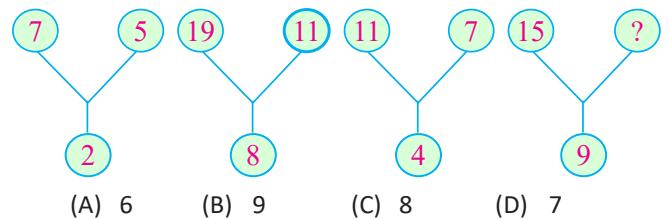
- Which one of the following buckets can hold maximum water?



- Which one of the following figures is square in shape?



- Which one of the following numbers will replace the question mark (?) in the number pattern given below?



- If = 41 and + = 67, then the value of is:

- (A) 26 (B) 24 (C) 16 (D) 18

- How many rectangles are there in the given figure?



- (A) 4 (B) 5 (C) 3 (D) 6

**ANSWERS**

1. (B) 2. (B) 3. (C) 4. (C) 5. (C) 6. (C) 7. (B) 8. (A) 9. (A) 10. (B)