

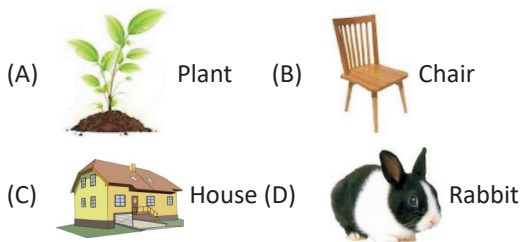
# International Olympiad of Science



## CLASS 1<sup>st</sup> SAMPLE QUESTIONS

The Actual Question Paper Contains 25 Questions. The Duration of the Test Paper is 40 Minutes.

1. Which one of the following can move from one place to another on its own?




2. Which one of the following statements is correct for the given picture?



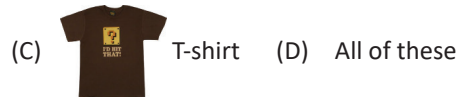

- (A) It is an egg laid by a bird.  
 (B) It is an animal product and grows in water.  
 (C) It is very salty in taste.  
 (D) It is a plant product and grows under the soil.

3. Identify the animal based on the characteristics given below.


- i. It can live in water as well as on land.  
 ii. It eats insects.  
 iii. It uses its long sticky tongue to take its food inside.




4. Which one of the following clothes is specially made to worn during the winter season?



5. Identify the reptile from the following.



6. Identify the cereal from the following.

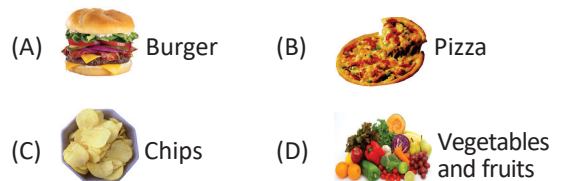


7. Who among the following uses the given instrument?



- (A) Plumber (B) Carpenter  
 (C) Cobbler (D) Painter

8. Identify the healthy and nutritious food from the following.



9. Identify the insect from the following.



(D) All of these

10. Look at the following animals and choose the correct option.



*Cheetah*



*Goat*

- (A) Cheetah is a grass eating and Goat is a flesh eating animal.
- (B) Cheetah is a flesh eating and Goat is a grass eating animal.
- (C) Cheetah and Goat both are grass eating animals.
- (D) Cheetah and Goat both are flesh eating animals.

**ANSWERS**

1. (D)    2. (D)    3. (B)    4. (B)    5. (B)    6. (C)    7. (B)    8. (D)    9. (B)    10. (B)