

Syllabus for CMO is available at <https://www.crestolympiads.com/cmo-syllabus>

Pattern and Marking Scheme

Class	Topic/Section	No. of Questions	Marks per Questions	Total Marks
	Mathematics	20	1	20
Prep/KG	Achiever's Section	5	2	10
	Grand Total	25	-	30

1. What is the time in a given clock?



(a) 4:00

(b) 5:00

2. Add the numbers:



(a)




(b)



CREST Olympiads – A digital initiative to enhance practical knowledge

3. Complete the series:



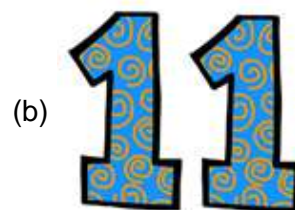
4. What is the shape of the given image?



(a) Circle

(b) Cone

5. How many months are there in a year?



CREST Olympiads – A digital initiative to enhance practical knowledge

6. Fill in the blank:
_____ comes before Friday.



(a) Thursday

(b) Saturday

7. Identify the 50 Paise coin:

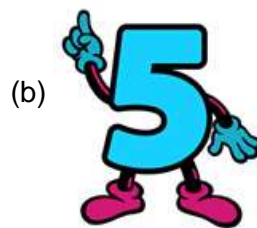
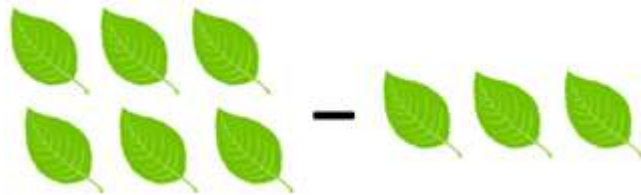


8. Identify the small animal:




CREST Olympiads – A digital initiative to enhance practical knowledge

9. Find the difference:



10. Identify the circle:



11. What is the shape of chocolate bar?



CREST Olympiads – A digital initiative to enhance practical knowledge

12. How much money is there?



(b) 10 Rs

(b) 2 Rs

13. Fill in the blanks:

_____ comes before October.



(a) November

(b) September

14. Complete the given series:



(a)

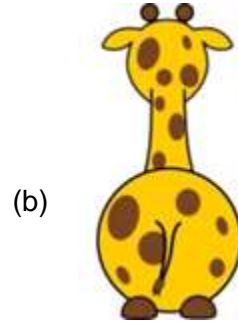
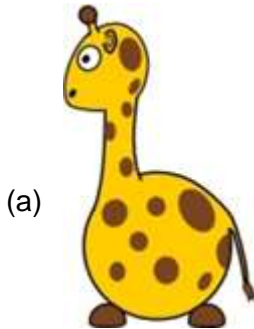
13

(b)

11

CREST Olympiads – A digital initiative to enhance practical knowledge

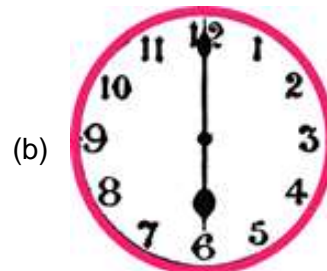
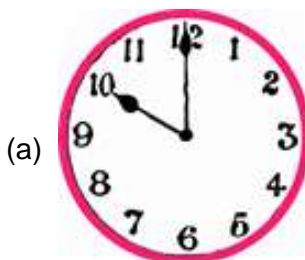
15. Which one is the back image of given image?



16. Identify the bird which is facing towards right:

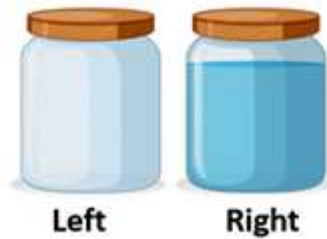


17. Which clock indicates 6:00?



CREST Olympiads – A digital initiative to enhance practical knowledge

18. Which jar is full?



(a) Left

(b) Right

19. Which sign should be used in place of '?':



(a)



(b)



20. Complete the series:



(a)






(b)

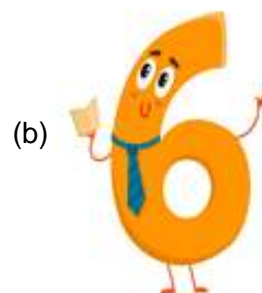
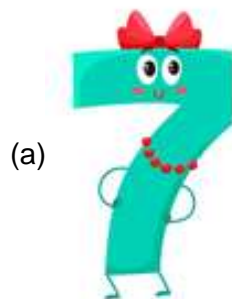


Achiever's Section

21. Find the chick which is different from others:



22. How many days are there in a week?



CREST Olympiads – A digital initiative to enhance practical knowledge

23. Which number is given in the image:



(a) Six

(b) Seven

24. Ayushi has 10 Rs in her hand. Her friend gave her 4 more rupees. Now how much money Ayushi has?

(a) 

(b) 

25. Find the missing number:



(a) 

(b) 

Answers

1. (b), 2. (a), 3. (b), 4. (b), 5. (a), 6. (a), 7.(a), 8.(b), 9. (a), 10. (b), 11. (b), 12. (a),
13. (b), 14. (a), 15. (b), 16. (a), 17.(b), 18.(b), 19. (b), 20. (b), 21. (a), 22. (a), 23. (a),
24. (b), 25. (a)