

Syllabus for CRO is available at <https://www.crestolympiads.com/cro-syllabus>


Pattern and Marking Scheme

Class	Topic/Section	No. of Questions	Marks per Questions	Total Marks
1 st to 4 th	Logical Reasoning	25	1	25
	Achiever's Section	10	2	20
	Grand Total	35	-	45
5 th to 10 th	Logical Reasoning	40	1	40
	Achiever's Section	10	2	20
	Grand Total	50	-	60

1. Find the odd one out from the given options:



2. Count the number of triangles in the given figure:

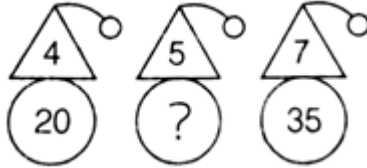


- (a) 6
(c) 4

- (b) 3
(d) 7

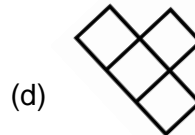
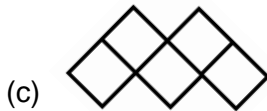
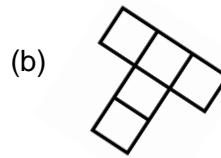
CREST Olympiads – A digital initiative to enhance practical knowledge

3. Find the missing number in the middle figure.



- (a) 15
(b) 30
(c) 25
(d) 35

4. Which of the following figures contains exactly four squares?



5. The weight of a basketball is measured in _____.



- (a) Litre
(b) Gram
(c) Kilometer
(c) Centimetre


CREST Olympiads – A digital initiative to enhance practical knowledge

6. In a row of trees, one tree is fifth from either end of the row. How many trees are there in the row?

- (a) 8 (b) 9
(c) 10 (d) 11
-

7. Which object is same as the given figure?



- (a)  
- (c)  
-

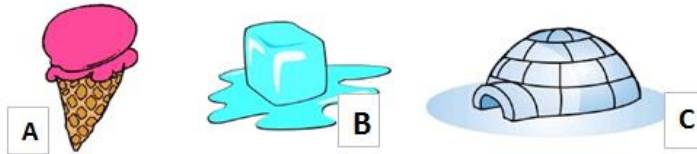
8. Find the figure which will replace the question mark (?) and complete the series given below:



- (a)  (b) 
- (c)  (d) 
-

Achiever's Section

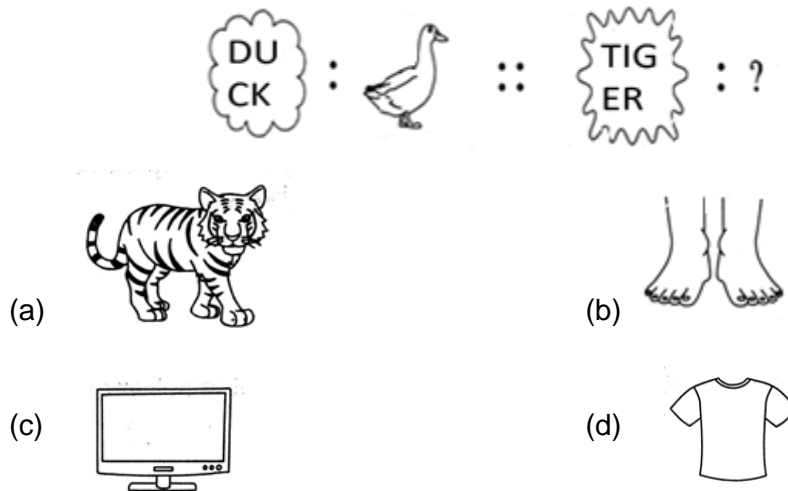
9. Arrange these objects from "cold to coldest".



- (a) C, B, A
(c) B, A, C

- (b) A, B, C
(d) B, C, A

10. There is a certain relationship between the pair of figures given on either side of (::) identify the relationship of given pair and find the matching term



Answers

1. (a), 2. (d), 3. (c), 4. (d), 5. (b), 6. (b), 7.(c), 8.(a), 9. (b), 10. (a)