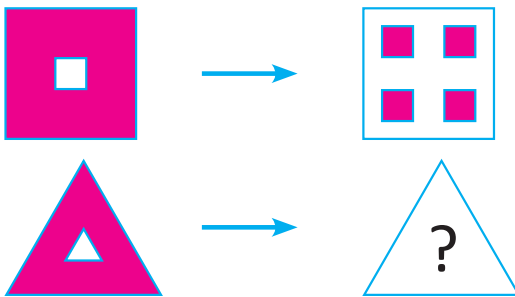




**CLASS 1 SAMPLE QUESTIONS**

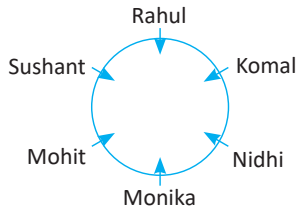
*The Actual Question Paper Contains 25 Questions. The Duration of the Test Paper is 40 Minutes.*

1. Identify the relationship between the pair and find the missing figure.



- A. B. C. D.


2. Six friends Rahul, Mohit, Komal, Sushant, Monika and Nidhi are sitting on a round table facing the center as shown below.



Who is sitting second to the right of Monika?

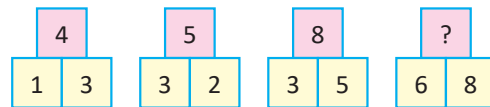
- A. Sushant      B. Nidhi  
C. Komal        D. Mohit

3. How many squares are there in the given figure?



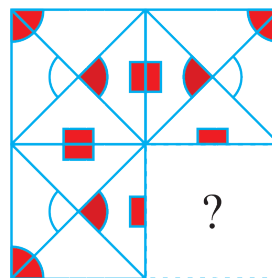
- A. 8                      B. 9  
C. 10                    D. 12

4. Which one of the following numbers will replace the question mark (?) in the number pattern given below?



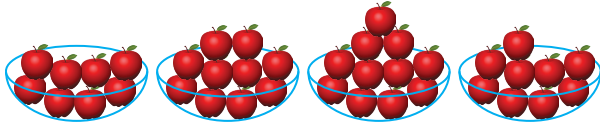
- A. 10                    B. 11  
C. 12                    D. 14

5. Which one of the following figures will complete the figure shown below?



- A. B. C. D.

6. Ankita, Priyanka, Monika and Sunita have apples as shown below:

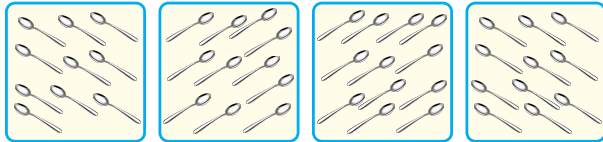


Ankita      Priyanka      Monika      Sunita

Who has apples more than 9 but less than 11?

- A. Ankita                      B. Priyanka  
C. Monika                     D. Sunita

7. Which one of the following boxes has the same number of spoons?



Box (1)      Box (2)      Box (3)      Box (4)

- A. Box (1) and box (3)  
B. Box (2) and box (4)  
C. Box (1) and box (2)  
D. Box (3) and box (4)

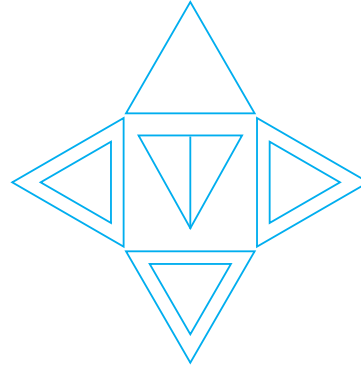
8. The 5<sup>th</sup> person from the right end is \_\_\_\_\_.

Arun    Megha    Priya    Nitin    Beena    Raj    Amit



- A. Megha                      B. Nitin  
C. Raj                         D. Priya

9. Count the number of triangles in the figure shown below:



- A. 7                              B. 8  
C. 9                              D. 10

10. Complete the pattern given below:



- A. F 11 12                      B. F 10 11  
C. F 9 10                        D. F 9 11



ANSWERS

1. (B)    2. (C)    3. (C)    4. (D)    5. (B)    6. (B)    7. (B)    8. (D)    9. (D)    10. (A)