

iRAO

International Reasoning and Aptitude Olympiad



Presented by:
**SILVER
ZONE
FOUNDATION**
NEW DELHI - INDIA

Organized by:

Silverzone Foundation

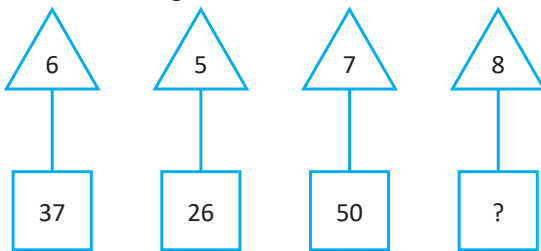
New Delhi, India

For supremacy in Mathematics
www.silverzone.org








CLASS 2 SAMPLE QUESTIONS

The Actual Question Paper Contains 25 Questions. The Duration of the Test Paper is 40 Minutes.

1. Find the missing number.



- A. 52
B. 64
C. 65
D. 66

2. If  +  +  = 22 and  + 
+  = 23, then find the value of .

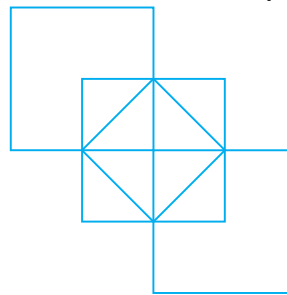
- A. 9
B. 10
C. 7
D. 12

3. Find the missing number in the given pattern.




- A. 56
B. 64
C. 50
D. 72



4. Count the number of squares in the given figure.

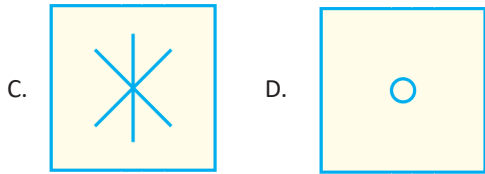


- A. 6
B. 7
C. 8
D. 9

5. Choose the correct option to replace the question mark (?).



- A.  B. 



6. Which one of the following numbers will replace the question mark (?) in the number pattern given below?










3	5	2	7	8	9	10	12
	23		26		37		?
7	8	9	8	5	15	20	28

- A. 61 B. 59
C. 60 D. 70

7. The first day of a month starts from Thursday. If the last day of the month is on Friday then the total number of days in the month is:

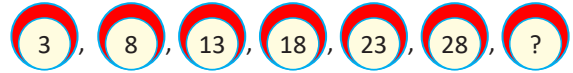
Month						
Sun	Mon	Tue	Wed	Thu	Fri	Sat
				1	2	3

- A. 28 B. 29
C. 30 D. 31

8. If  +  +  = 97 grams,  +  +  = 137 grams and  +  = 55 grams, then what is the weight of  ?

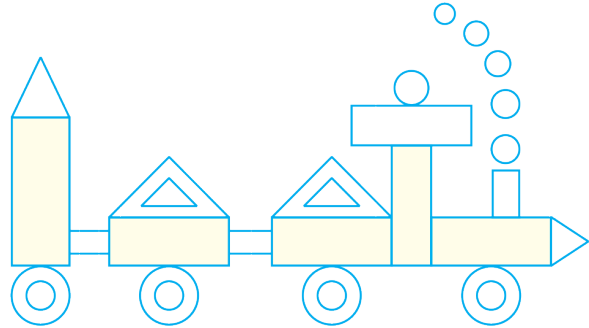
- A. 91 grams B. 87 grams
C. 105 grams D. 95 grams

9. What comes next in the number series given below?



- A. 32 B. 33
C. 38 D. 37

10. Observe the picture shown below and then find the correct statement from the following options.



- A. There are 5 more circles than the number of rectangles.
B. There are 5 more triangles than the number of rectangles.
C. There are 10 more circles than the number of triangles.
D. None of these



ANSWERS

1. (C) 2. (C) 3. (B) 4. (C) 5. (D) 6. (D) 7. (C) 8. (D) 9. (B) 10. (C)