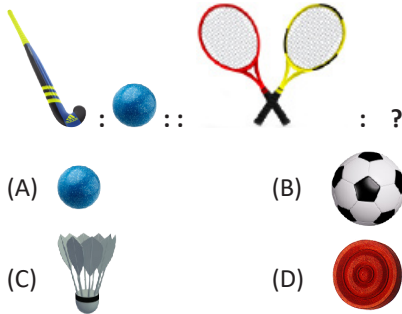




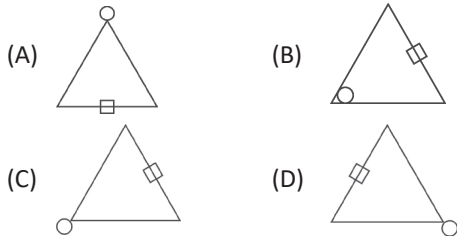
### CLASS 3 SAMPLE QUESTIONS

The Actual Question Paper Contains 30 Questions. The Duration of the Test Paper is 40 Minutes.

1. Identify the relationship between the pair of figures given on either side of :: and then find the missing figure.



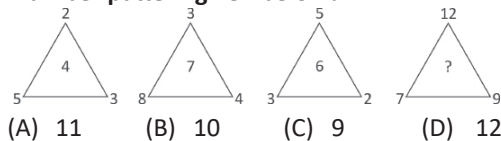
2. Find the odd one out.



3. Which one of the following pairs of letters will replace the question mark (?) in the letter series given below?




4. Which number will replace the question mark (?) in the number pattern given below?



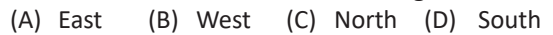
5. In a row of 13 boys, I am fifth from right. My position from left is:



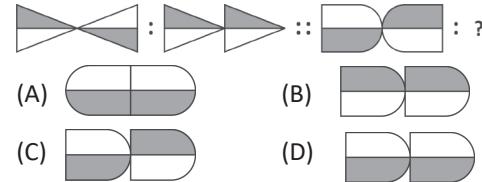
6. How many triangles are there in the figure given below?



7. One morning after sunrise, I was standing facing an electric pole. The shadow of the pole fell exactly to my left side. Which direction was I facing?



8. Identify the relationship between the pair of figures on either side of :: and then find the missing figure.

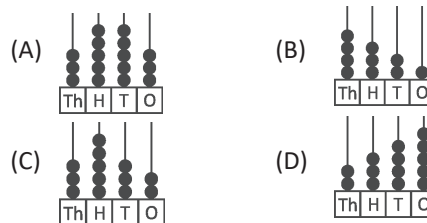


9. Divya is making this calendar for the bulletin board. Which day of the week should be on 27th February 20XX?

February 20XX						
Sun	Mon	Tue	Wed	Thu	Fri	Sat
			1	2	3	4
5	6	7	8	9	10	11



10. Which one of the following abacuses shows the number more than 4000?



### ANSWERS

1. (C) 2. (B) 3. (D) 4. (B) 5. (A) 6. (C) 7. (C) 8. (D) 9. (B) 10. (B)