


International Informatics Olympiad



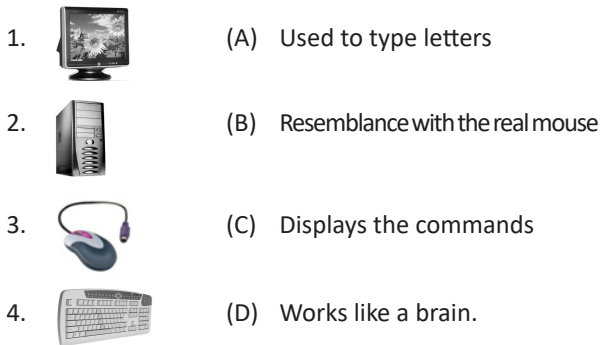
CLASS 2nd SAMPLE QUESTIONS

The Actual Question Paper Contains 25 Questions. The Duration of the Test Paper is 40 Minutes.

1. In computing, which one of the following is a device that optically scans images, printed text, handwriting or an object and converts it into a digital image?



2. Given below the figures of the parts of a computer. Match them correctly with the details given on the other side.



- (A) 1 → D, 2 → C, 3 → B, 4 → A
 (B) 1 → A, 2 → B, 3 → C, 4 → D
 (C) 1 → C, 2 → A, 3 → B, 4 → D
 (D) 1 → C, 2 → D, 3 → B, 4 → A

3. Which of the following is called the pointing device?

- A. Keyboard B. Mouse
 C. CPU D. Monitor

4. Which of the following is called the brain of a computer?

- (A) ALU (B) Memory
 (C) CPU (D) Control Unit

5. CD-ROM stands for _____.

- (A) Compact Disk Random Access Memory
 (B) Compact Disk Read Only Memory
 (C) Common Disk Read Only Memory
 (D) Compact Data Random Access Memory


6. Which of the following is/are the correct statements?

- Clicking the mouse implies clicking left button of the mouse.
 - Right click implies pressing and releasing the right mouse button once.
 - The right mouse button is never double-clicked.
- (A) Only 1 is correct
 (B) Both 2 and 3 are correct
 (C) Both 1 and 2 are true
 (D) All the statements of correct

7. The keys used to insert letters like A, B, C etc. are called _____.

- (A) Special keys (B) Alphabet keys
 (C) Navigation keys (D) Function keys

8. Which figure fits next in the sequence given below?

Question Figure: 

- (A)  (B)  (C)  (D) 

9. Fill in the empty box above with the correct picture from below.



- (A) (B) (C) (D)

10. Which of the following is/are correct about a computer mouse?

- (A) It looks like a real mouse.
 (B) It can run and eat like a real mouse.
 (C) It is an input device.
 (D) Both A and C

ANSWERS

1. B 2. D 3. B 4. C 5. B 6. D 7. B 8. C 9. A 10. D